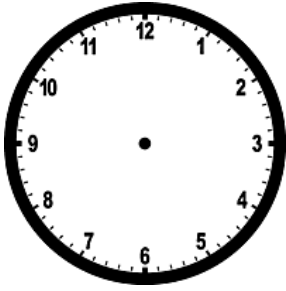


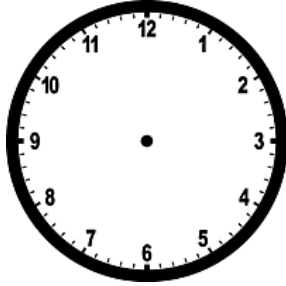
Fraction of an Hour

Name _____

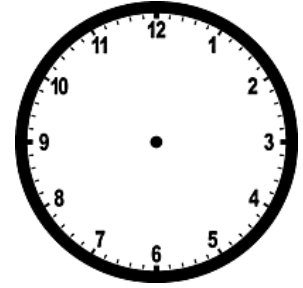
How many minutes of an hour is each fraction worth? Shade and write minutes.



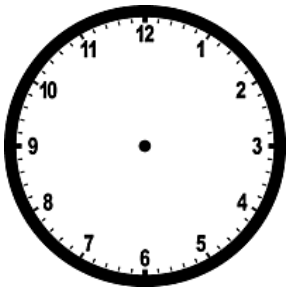
$1/4$ of an hour = _____ minutes



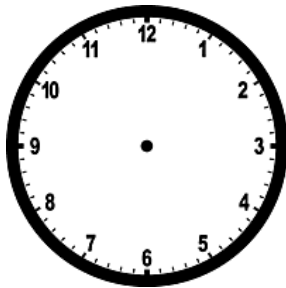
$1/2$ of an hour = _____ minutes



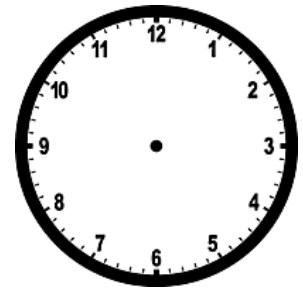
$3/4$ of an hour = _____ minutes



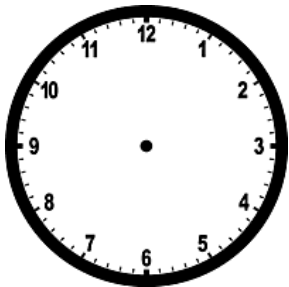
$1/6$ of an hour = _____ minutes



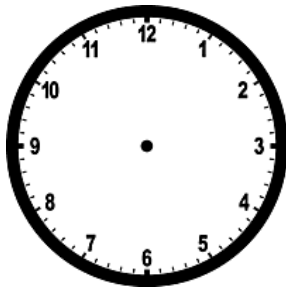
$1/3$ of an hour = _____ minutes



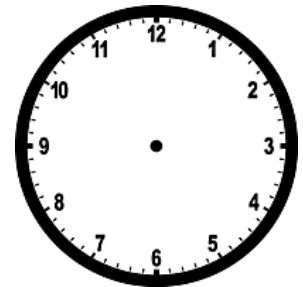
$5/6$ of an hour = _____ minutes



$2/3$ of an hour = _____ minutes



$5/12$ of an hour = _____ minutes



$11/12$ of an hour = _____ minutes